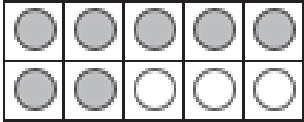
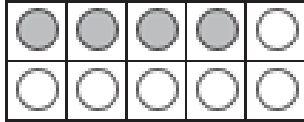
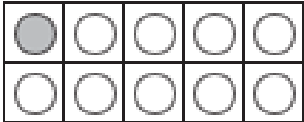
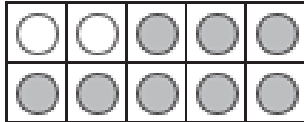
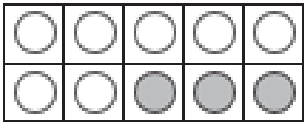
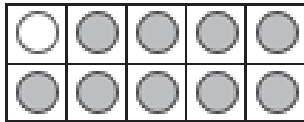
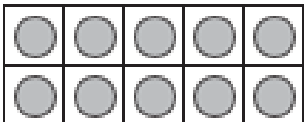
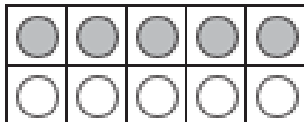


Count the coloured circles and write the number on the first line. Count the white circles and write the number on the second line.

<p>1.</p>  <p>_____ + _____ = 10</p>	<p>2.</p>  <p>_____ + _____ = 10</p>
<p>3.</p>  <p>_____ + _____ = 10</p>	<p>4.</p>  <p>_____ + _____ = 10</p>
<p>5.</p>  <p>_____ + _____ = 10</p>	<p>6.</p>  <p>_____ + _____ = 10</p>
<p>7.</p>  <p>_____ + _____ = 10</p>	<p>8.</p>  <p>_____ + _____ = 10</p>